

EXAM 2, M312, Section 30353, 11/08/13

NAME: Enrique Areyan

USERNAME: eareyan

Show your work. Simplify answers when possible. No books, notes, calculators are allowed. Use back sides as scratch paper (they will not be graded).

Do not write here

1 10 /10

2 10 /10

3 10 /10

4 10 /10


5 10 /10

raw total 50 /50

standardized 100 /100

letter A+

1. (10 pts) Evaluate $\iint_D xy^2 dx dy$, where $D = \{(x, y) \in \mathbb{R}^2 : x^2 + y^2 \leq 1, y \geq 0\}$.



$$\int_{-1}^1 \int_0^{\sqrt{1-x^2}} xy^2 dy dx = \int_{-1}^1 \frac{x}{3} [y^3]_0^{\sqrt{1-x^2}} dx = \int_{-1}^1 \frac{x}{3} (\sqrt{1-x^2})^3 dx$$

$$= \frac{1}{3} \int_{-1}^1 x (1-x^2)^{3/2} dx$$

change variables to:

$$u = 1 - x^2 \Rightarrow du = -2x dx$$

$$\Rightarrow \frac{du}{-2} = x dx$$

$$= \frac{1}{2} \int \frac{u^{3/2}}{-2} du = -\frac{1}{4} \left[\frac{2}{5} u^{5/2} \right]_0^1$$

changing back to x:


$$= -\frac{1}{10} [(1-x^2)^{5/2}]_{-1}^1$$

$$= -\frac{1}{10} [0 - (0)] = \boxed{\frac{0}{10}}$$

2. (10 pts) Evaluate $\iiint_W \frac{dx dy dz}{(x^2 + y^2 + z^2)^{3/2}}$, where $W = \{(x, y, z) \in \mathbb{R}^3 : 1 < x^2 + y^2 + z^2 < 4\}$.

Using spherical coordinates:

$$\begin{aligned} x &= \rho \cos \theta \sin \varphi \\ y &= \rho \sin \theta \sin \varphi \\ z &= \rho \cos \varphi \end{aligned} \quad \text{the jacobian is } \rho^2 \sin \varphi.$$



$$\iiint_W \frac{dx dy dz}{(x^2 + y^2 + z^2)^{3/2}} = \int_0^\pi \int_0^{2\pi} \int_1^2 \frac{\rho^2 \sin \varphi d\rho d\theta d\varphi}{(\rho^2)^{3/2}}$$

$$= \int_0^\pi \int_0^{2\pi} \int_1^2 \frac{\rho^2 \sin \varphi d\rho d\theta d\varphi}{\rho^3}$$

$$= \int_0^\pi \int_0^{2\pi} \int_1^2 \frac{\sin \varphi}{\rho} d\rho d\theta d\varphi$$

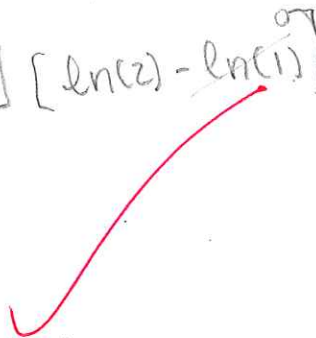
$$= 2\pi \int_0^\pi \sin \varphi d\varphi \int_1^2 \frac{1}{\rho} d\rho$$

$$= 2\pi [-\cos \varphi]_0^\pi [\ln(\rho)]_1^2$$

$$= 2\pi [-\cos \pi + \cos(0)] [\ln(2) - \ln(1)]$$

$$= 2\pi [1 + 1] \ln(2)$$

$$= \boxed{4 \ln(2) \pi}$$



(10)

3. (10 pts) Let S be a surface in \mathbb{R}^3 given by the conditions $x^2 + y^2 + z^2 = 2$, $z \geq 1$. Find a parametrization of it corresponding to the representation of this surface as a graph of a function of x and y . Using it, find the area of this surface.

$$x^2 + y^2 + z^2 = 2 \Rightarrow z = \pm \sqrt{2 - x^2 - y^2}$$

Since we are only interested in values such that $z \geq 1$.


We care only about the positive part:

$$z = \sqrt{2 - x^2 - y^2}, \quad z \geq 1$$

The parametrization is:

$$\Phi(x, y) = (x, y, \sqrt{2 - x^2 - y^2}), \quad 0 \leq x^2 + y^2 \leq 1$$

where D is the projection onto xy -plane, i.e., $x^2 + y^2 + 1^2 = 2 \Rightarrow x^2 + y^2 \leq 1$



the area of the surface is given by:

$$\iint_S dS = \iint_D \|\Phi_x \times \Phi_y\| dx dy, \quad \text{where:}$$

$$\begin{aligned} \Phi_x &= \left(1, 0, \frac{-x}{\sqrt{2-x^2-y^2}}\right) \\ \Phi_y &= \left(0, 1, \frac{-y}{\sqrt{2-x^2-y^2}}\right) \end{aligned} \Rightarrow \Phi_x \times \Phi_y = \begin{pmatrix} \frac{x}{\sqrt{2-x^2-y^2}} \\ \frac{y}{\sqrt{2-x^2-y^2}} \\ 1 \end{pmatrix}$$

$$\|\Phi_x \times \Phi_y\| = \sqrt{\frac{x^2 + y^2}{2 - x^2 - y^2} + 1} = \sqrt{\frac{x^2 + y^2 + 2 - x^2 - y^2}{2 - x^2 - y^2}} = \frac{\sqrt{2}}{\sqrt{2 - x^2 - y^2}}. \quad \text{Hence,}$$

$$\text{Surface area} = \iint_D \frac{\sqrt{2}}{\sqrt{2 - (x^2 + y^2)}} dx dy, \quad \text{changing to Polar:}$$

$$\sqrt{2} \int_0^{2\pi} \int_0^1 \frac{1}{\sqrt{2-r^2}} r dr d\theta = 2\sqrt{2}\pi \int_0^1 \frac{r}{\sqrt{2-r^2}} dr$$

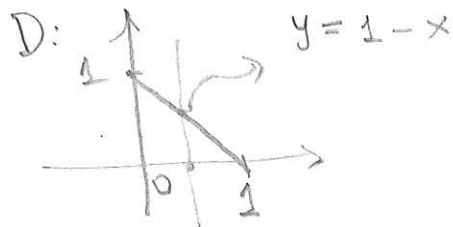
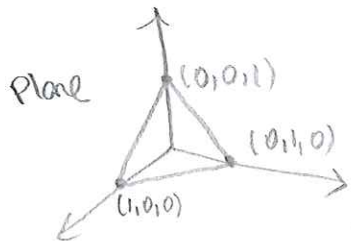
changing back for:
 $u = 2 - r^2 \Rightarrow du = -2r dr$
 $\Rightarrow \frac{du}{-2} = r dr$

$$\begin{aligned} &\sim 2\sqrt{2}\pi \int_0^1 \frac{1}{\sqrt{u}} \frac{du}{-2} = -\sqrt{2}\pi \int_0^1 \frac{1}{\sqrt{u}} du = -\sqrt{2}\pi [2\sqrt{u}]_0^1 \sim -2\sqrt{2}\pi [\sqrt{2-r^2}]_0^1 \\ &= -2\sqrt{2}\pi [\sqrt{2-1^2} - \sqrt{2-0^2}] = 2\sqrt{2}\pi [\sqrt{2} - 1] \end{aligned}$$

10

4. (10 pts) Find $\iint_S x \, dS$, where S is the part of the plane $x + y + z = 1$ in the positive octant defined by $x \geq 0, y \geq 0, z \geq 0$.

First, we need to parametrize the plane: $z = 1 - x - y$.



So, a parametrization for the plane is:

$$\Phi(x, y) = (x, y, 1 - x - y), \text{ where } 0 \leq y \leq 1 - x, 0 \leq x \leq 1$$

$$\Phi_x = (1, 0, -1), \quad \Phi_y = (0, 1, -1), \quad \Phi_x \times \Phi_y = \hat{i}(1) - \hat{j}(-1) + \hat{k}(1) = \langle 1, 1, 1 \rangle$$

$$\Phi_y = (0, 1, -1)$$

$$\|\Phi_x \times \Phi_y\| = \sqrt{1^2 + 1^2 + 1^2} = \sqrt{3}. \quad \text{Therefore,}$$

$$\iint_S x \, dS = \iint_D x \|\Phi_x \times \Phi_y\| \, dy \, dx = \sqrt{3} \int_0^1 \int_0^{1-x} x \, dy \, dx = \sqrt{3} \int_0^1 x(1-x) \, dx$$

$$= \sqrt{3} \int_0^1 x - x^2 \, dx = \sqrt{3} \left[\frac{x^2}{2} - \frac{x^3}{3} \right]_0^1 = \sqrt{3} \left[\frac{1}{2} - \frac{1}{3} \right] = \sqrt{3} \left[\frac{3-2}{6} \right] = \boxed{\frac{\sqrt{3}}{6}}$$

5. (10 pts) Let $\mathbf{F} = (x, x^2, yz)$ represent the velocity field of a fluid (velocity measured in meters per second). Compute how many cubic meters of fluid per second are crossing the xy -plane through the square $0 \leq x \leq 1, 0 \leq y \leq 1$.

the number of cubic meters of fluid per second is given by:

$$\iint_S \vec{F} \cdot d\vec{S} = \iint_D \vec{F} \cdot \Phi_x \times \Phi_y \, dx \, dy,$$

where Φ is a parametrization of the surface, in this case the xy -plane.

So, $\Phi(x,y) = (x, y, 0); 0 \leq x \leq 1, 0 \leq y \leq 1$.

$$\Phi_x = (1, 0, 0)$$

$$\Phi_y = (0, 1, 0)$$

$$\Phi_x \times \Phi_y = (0, 0, 1)$$

therefore, $\vec{F}(\Phi(x,y)) \cdot \Phi_x \times \Phi_y = \langle x, x^2, y \cdot 0 \rangle \cdot \langle 0, 0, 1 \rangle = x \cdot 0 + x^2 \cdot 0 + y \cdot 0 \cdot 1 = 0$

Hence;

$$\iint_D \vec{F} \cdot \Phi_x \times \Phi_y \, dx \, dy = \iint_D 0 \, dx \, dy = 0 \iint_D dx \, dy = \boxed{0}$$

✓

10